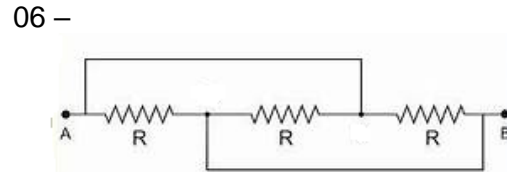
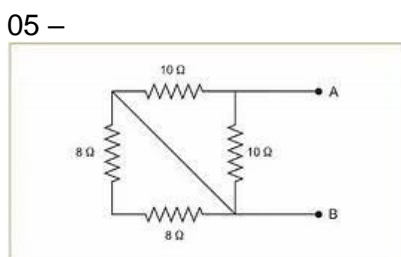
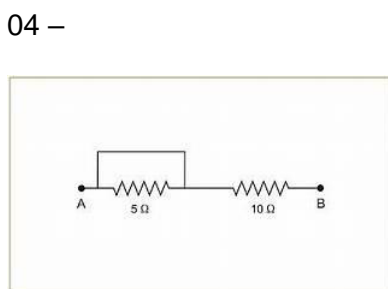
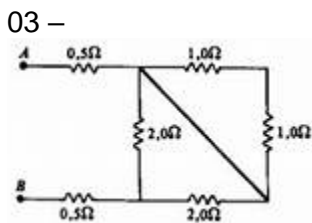
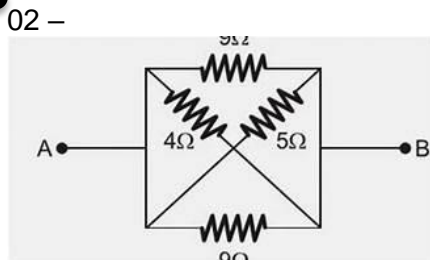
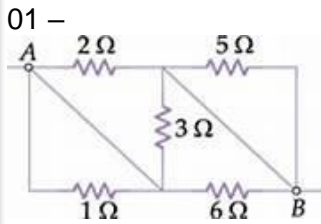
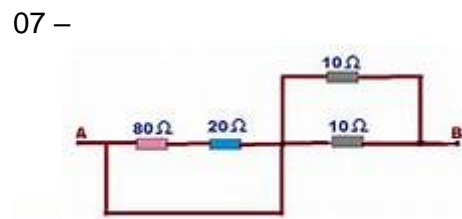


Determine a resistência equivalente entre os pontos A e B.



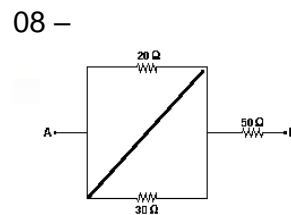
Gab:  $R/3$

Gab:  $1\Omega$



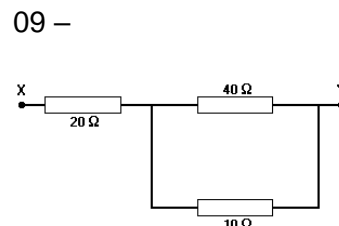
Gab:  $5\Omega$

Gab: zero



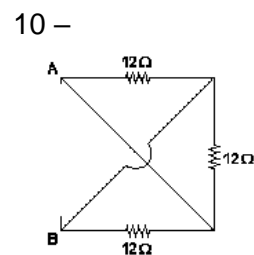
Gab:  $50\Omega$

Gab:  $2\Omega$



Gab:  $28\Omega$

Gab:  $10\Omega$



Gab:  $4\Omega$

Gab:  $5\Omega$